

© International Baccalaureate Organization 2023

All rights reserved. No part of this product may be reproduced in any form or by any electronic or mechanical means, including information storage and retrieval systems, without the prior written permission from the IB. Additionally, the license tied with this product prohibits use of any selected files or extracts from this product. Use by third parties, including but not limited to publishers, private teachers, tutoring or study services, preparatory schools, vendors operating curriculum mapping services or teacher resource digital platforms and app developers, whether fee-covered or not, is prohibited and is a criminal offense.

More information on how to request written permission in the form of a license can be obtained from <https://ibo.org/become-an-ib-school/ib-publishing/licensing/applying-for-a-license/>.

© Organisation du Baccalauréat International 2023

Tous droits réservés. Aucune partie de ce produit ne peut être reproduite sous quelque forme ni par quelque moyen que ce soit, électronique ou mécanique, y compris des systèmes de stockage et de récupération d'informations, sans l'autorisation écrite préalable de l'IB. De plus, la licence associée à ce produit interdit toute utilisation de tout fichier ou extrait sélectionné dans ce produit. L'utilisation par des tiers, y compris, sans toutefois s'y limiter, des éditeurs, des professeurs particuliers, des services de tutorat ou d'aide aux études, des établissements de préparation à l'enseignement supérieur, des fournisseurs de services de planification des programmes d'études, des gestionnaires de plateformes pédagogiques en ligne, et des développeurs d'applications, moyennant paiement ou non, est interdite et constitue une infraction pénale.

Pour plus d'informations sur la procédure à suivre pour obtenir une autorisation écrite sous la forme d'une licence, rendez-vous à l'adresse <https://ibo.org/become-an-ib-school/ib-publishing/licensing/applying-for-a-license/>.

© Organización del Bachillerato Internacional, 2023

Todos los derechos reservados. No se podrá reproducir ninguna parte de este producto de ninguna forma ni por ningún medio electrónico o mecánico, incluidos los sistemas de almacenamiento y recuperación de información, sin la previa autorización por escrito del IB. Además, la licencia vinculada a este producto prohíbe el uso de todo archivo o fragmento seleccionado de este producto. El uso por parte de terceros —lo que incluye, a título enunciativo, editoriales, profesores particulares, servicios de apoyo académico o ayuda para el estudio, colegios preparatorios, desarrolladores de aplicaciones y entidades que presten servicios de planificación curricular u ofrezcan recursos para docentes mediante plataformas digitales—, ya sea incluido en tasas o no, está prohibido y constituye un delito.

En este enlace encontrará más información sobre cómo solicitar una autorización por escrito en forma de licencia: <https://ibo.org/become-an-ib-school/ib-publishing/licensing/applying-for-a-license/>.

Chemistry

Higher level

Paper 3

11 May 2023

Zone A afternoon | Zone B morning | Zone C afternoon

Candidate session number

1 hour 15 minutes

--	--	--	--	--	--	--	--	--	--

Instructions to candidates

- Write your session number in the boxes above.
- Do not open this examination paper until instructed to do so.
- Answers must be written within the answer boxes provided.
- A calculator is required for this paper.
- A clean copy of the **chemistry data booklet** is required for this paper.
- The maximum mark for this examination paper is **[45 marks]**.

Section A	Questions
Answer all questions.	1 – 2

Section B	Questions
Answer all of the questions from one of the options.	
Option A — Materials	3 – 5
Option B — Biochemistry	6 – 11
Option C — Energy	12 – 15
Option D — Medicinal chemistry	16 – 21



Please **do not** write on this page.

Answers written on this page
will not be marked.



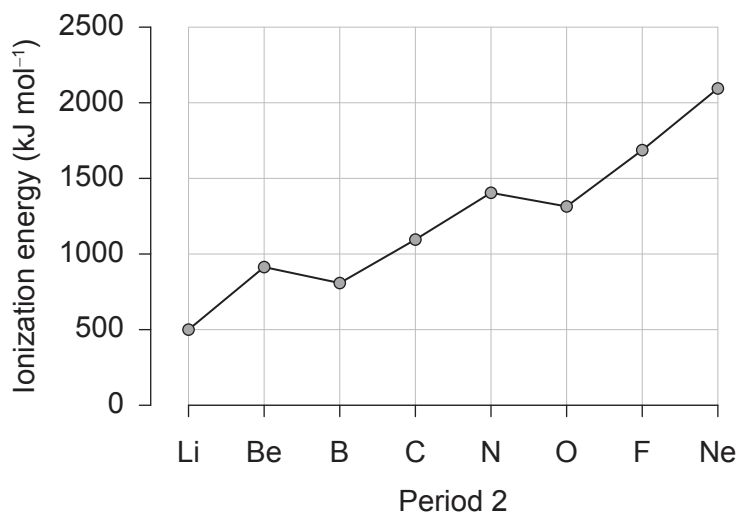
44EP02

Section A

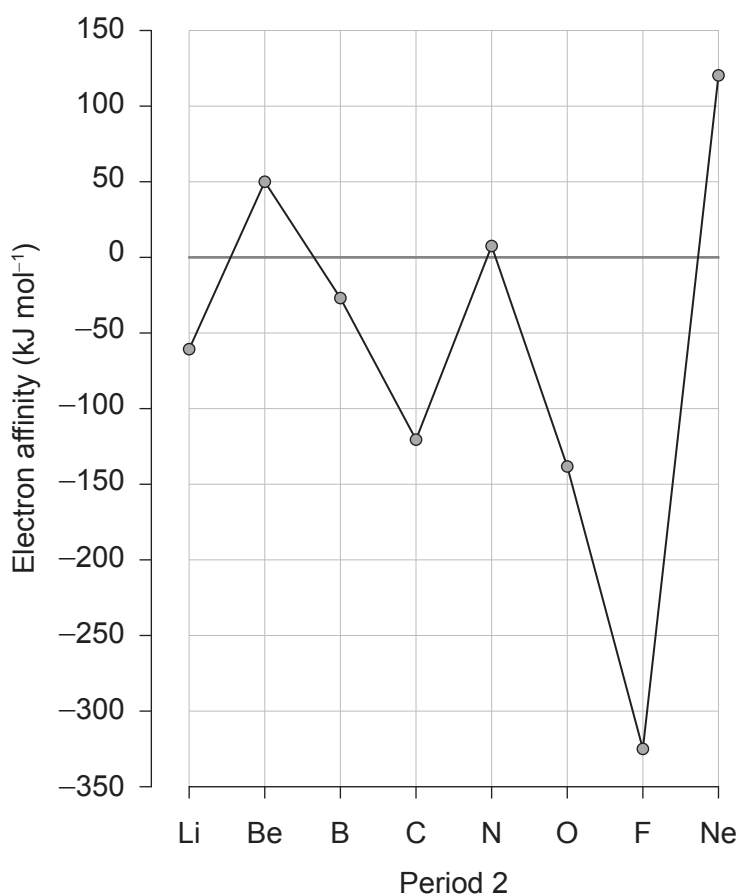
Answer **all** questions. Answers must be written within the answer boxes provided.

- Graphs showing the first ionization energy and first electron affinity of the elements in period 2 of the periodic table are shown.

First ionization energy



First electron affinity



(This question continues on the following page)



44EP03

Turn over

(Question 1 continued)

- (e) Suggest reasons why noble gases have the largest first ionization energy and largest positive first electron affinity in their period. [2]

Largest first ionization energy:

.....

Largest positive first electron affinity:

.....

- (f) Suggest, giving **one** reason, how the first electron affinity of xenon compares with that of neon. [1]

.....

.....

.....



44EP05

Turn over

2. Metals A, B, C, D, and E were placed in sulfate solutions.

(a) The results are given where ✓ = reaction occurred and ✗ = no reaction.

Metal	ASO ₄ (aq)	BSO ₄ (aq)	CSO ₄ (aq)	DSO ₄ (aq)	ESO ₄ (aq)
A	—	✓	✗	✓	✓
B	✗	—	✗	✓	✓
C	✓	✓	—	✓	✓
D	✗	✗	✗	—	✓
E	✗	✗	✗	✗	—

(i) Identify the oxidation state of metal A in ASO₄. [1]

.....
.....

(ii) Deduce the activity series of the metals. [1]

.....
.....

(This question continues on the following page)



(Question 2 continued)

- (b) Sketch the voltaic cell that produces the greatest electromotive force, EMF, using the information in part (a). Label the direction of electron flow, salt bridge, anode, cathode, the metals (A–E) and solutions used in each half-cell. [4]

- (c) Deduce **one** metal that could be electroplated, with high efficiency, on to a metal key using an aqueous salt of the metal. Use section 24 of the data booklet. [1]

.....

.....



Section B

Answer **all** of the questions from **one** of the options. Answers must be written within the answer boxes provided.

Option A — Materials

3. New materials have brought many benefits to society but come with associated risks.

(a) High-pressure carbon monoxide disproportionation (HiPco) produces carbon atoms that react with nano catalysts to produce carbon nanotubes.

(i) Write the equation for the disproportionation of carbon monoxide to produce carbon atoms. [1]

.....
.....

(ii) Calculate the percent atom economy of producing carbon using this method. Use section 1 of the data booklet. [1]

.....
.....
.....

(iii) Outline how a metal functions as a heterogeneous catalyst. [2]

.....
.....
.....
.....

(iv) Explain whether the production of carbon nanotubes using HiPco is a bottom up or top down nanotechnology technique. [1]

.....
.....
.....

(Option A continues on the following page)



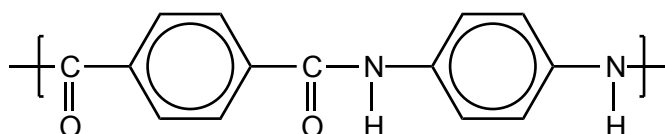
44EP08

(Option A, question 3 continued)

- (v) Suggest **one** health risk of using nanoparticles. [1]

.....
.....

- (b) Kevlar® is a recyclable polyamide polymer and a liquid crystal. One repeating unit of the polyamide is shown.



- (i) Outline what is meant by a *liquid crystal*. [1]

.....
.....

- (ii) Some liquid crystal displays (LCD) use liquid crystals between two polarizing filters. The display appears black until a small voltage is applied. Outline how the liquid crystals allow polarized light to pass through the filters. [2]

.....
.....
.....
.....

- (iii) Identify the resin identification code (RIC) that applies to Kevlar®. Use section 30 of the data booklet. [1]

.....
.....

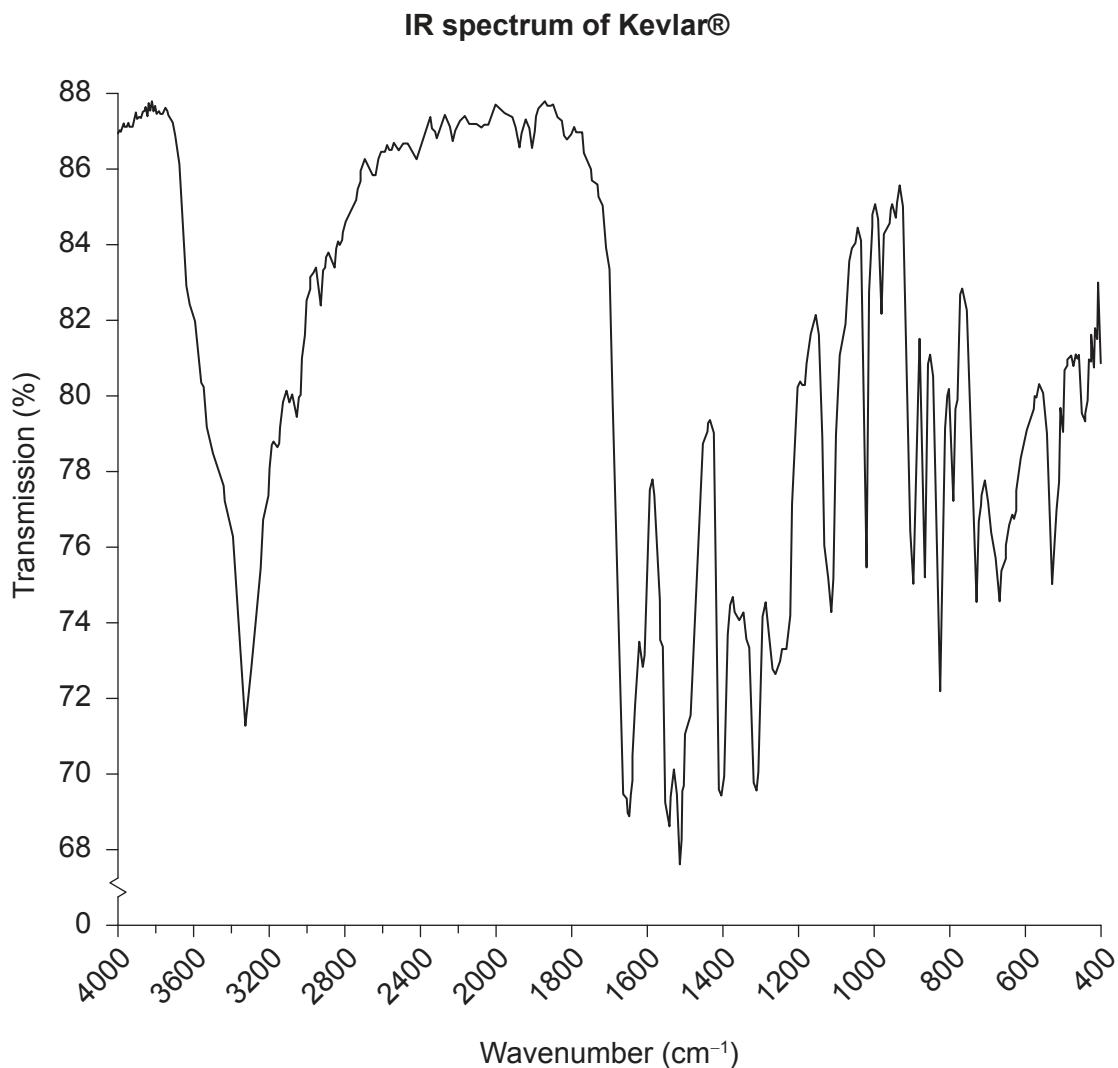
(Option A continues on the following page)



Turn over

(Option A, question 3 continued)

The IR spectrum of Kevlar® is shown.



- (iv) Deduce the peak in the Kevlar® IR spectrum which would not be found in compounds with any other RIC code. Use Sections 26 and 30 of the data booklet. [1]

.....

.....

(Option A continues on the following page)



44EP10

(Option A, question 3 continued)

- (v) Kevlar® is a condensation polymer. Distinguish between addition and condensation polymerization, in terms of monomers and products.

[3]

Monomers:
.....
.....
.....
.....
Products:
.....
.....
.....

(Option A continues on page 13)



44EP11

Turn over

Please **do not** write on this page.

Answers written on this page
will not be marked.



44EP12

(Option A continued)

4. Metals are often alloyed for desired characteristics.

- (a) Explain why metals alloyed with another metal are usually harder and stronger but poorer conductors than the pure metal. [3]

.....

.....

.....

.....

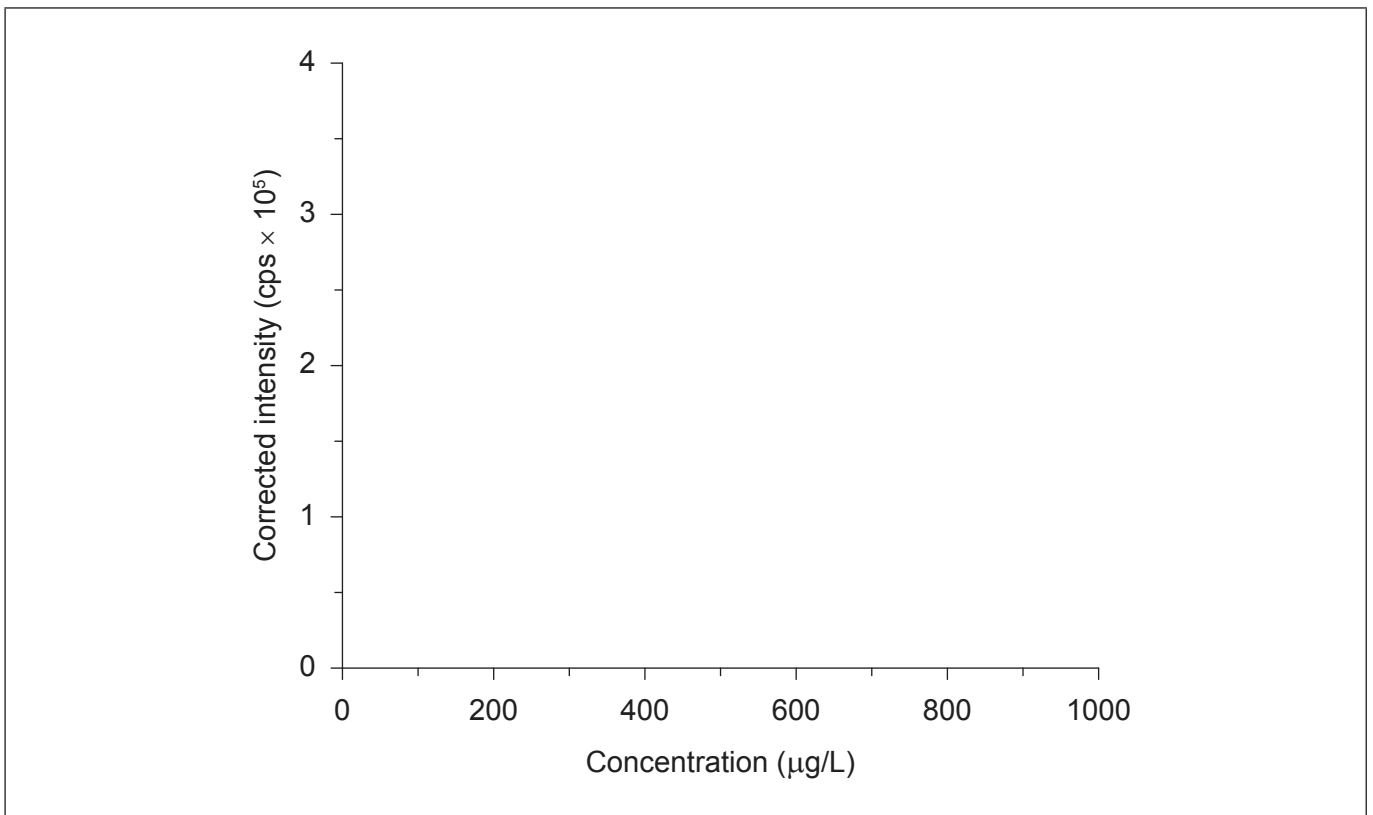
.....

.....

.....

- (b) Bronze is one of the oldest known alloys. Inductively coupled plasma spectroscopy can be combined with mass spectrometry (ICP-MS) or optical emission spectroscopy (ICP-OES) to analyse the structure and composition of alloys.

Sketch a typical calibration curve for ICP-OES. [1]



(Option A continues on the following page)



44EP13

Turn over

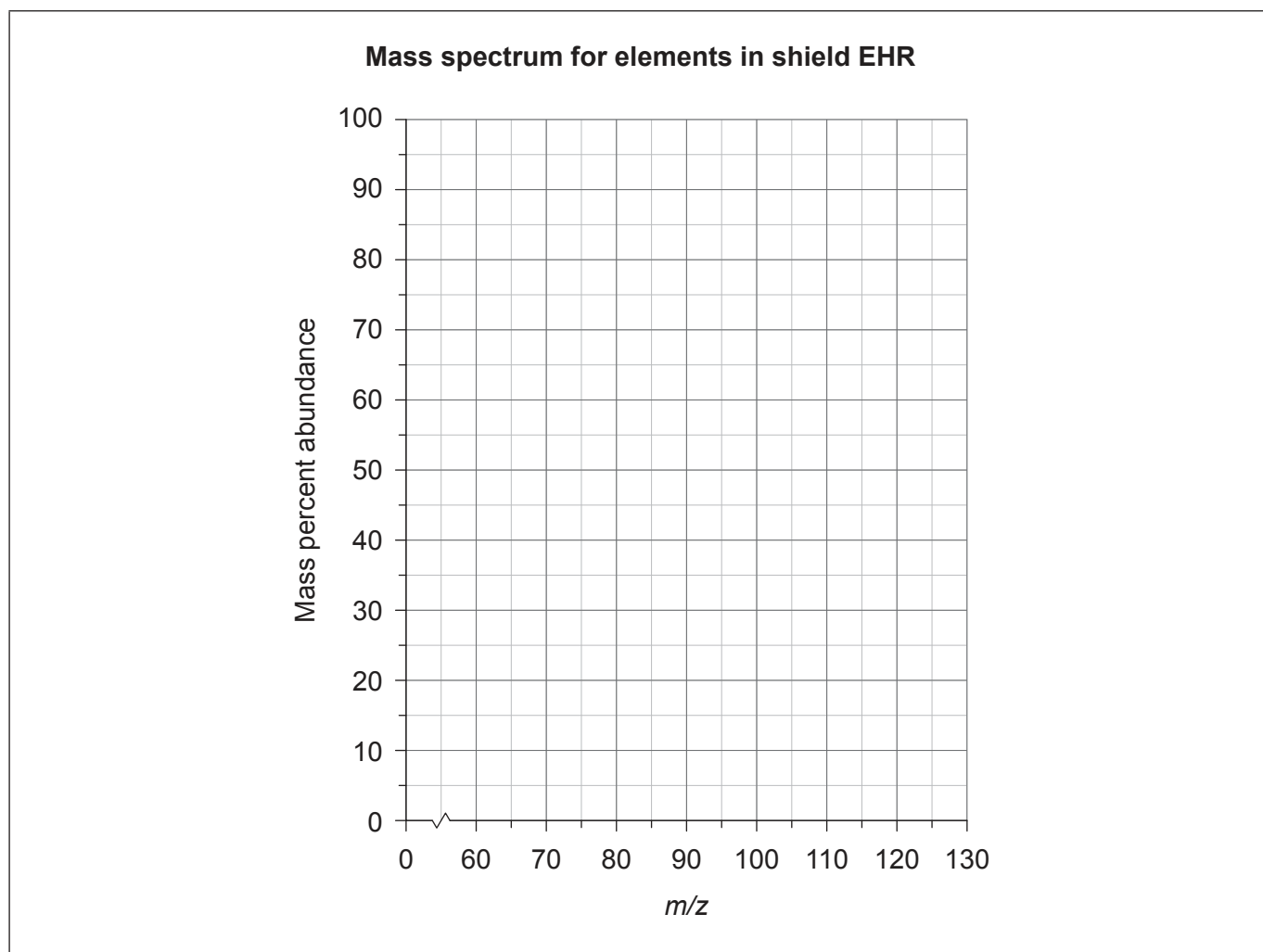
(Option A, question 4 continued)

- (c) Various bronze shields from Ayanis fortress in Turkey, dated 670 BCE, were analysed using ICP-MS.

Removed for copyright reasons

- (i) Draw the expected mass spectrum produced by shield EHR for the range given on the graph. Use relative atomic mass, ignoring isotopes.

[1]



(Option A continues on the following page)



44EP14

(Option A, question 4 continued)

- (ii) Explain the role of the inductively coupled plasma (ICP) torch in allowing the sample to be injected into the mass spectrometer for analysis.

[2]

.....

.....

.....

(Option A continues on the following page)

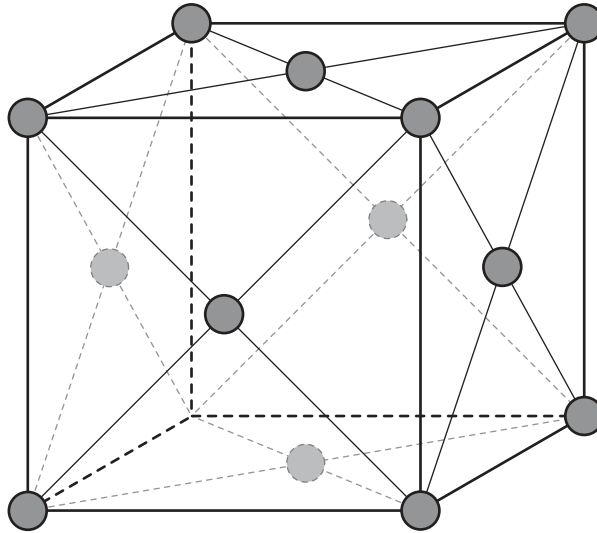


44EP15

Turn over

(Option A continued)

5. Copper forms a face-centred cubic structure:



(a) (i) Identify the coordination number and number of atoms per unit cell for this structure. [2]

Coordination number:

.....

Number of atoms per unit cell:

.....

(ii) The edge length of a unit cell of copper is 3.61×10^{-8} cm. Determine the density of copper, in g cm^{-3} , using your answer to part (a)(i) and sections 2 and 6 of the data booklet. [3]

.....

.....

.....

.....

.....

.....

(Option A continues on the following page)



44EP16

(Option A, question 5 continued)

- (b) The K_{sp} of copper(II) hydroxide is 2.2×10^{-20} . Calculate the molar solubility of $\text{Cu}^{2+}(\text{aq})$ ions in a solution of pH 9. [2]

.....

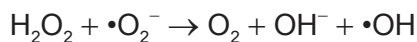
.....

.....

.....

.....

The Haber–Weiss reaction produces hydroxyl radicals.



- (c) Show the two-step mechanism by which Cu^{2+} ions can catalyse this reaction by reacting with the superoxide ion, $\cdot\text{O}_2^-$, in the first step. [2]

.....

.....

.....

End of Option A



Option B — Biochemistry

6. Vitamins are micronutrients necessary for the correct functioning of the body.

(a) Outline why vitamins usually need to be obtained from food sources. [1]

.....
.....

(b) State **two** factors, other than concentration, that must be controlled for correct metabolic functioning in the cytoplasm of a cell. [1]

.....
.....

7. Lipids and carbohydrates play an essential role in the body.

(a) (i) State the general formula of a carbohydrate. [1]

.....

(ii) Fructose is a carbohydrate. Determine the energy, in kJ, released by the respiration of 10.5 g of fructose, $C_6H_{12}O_6$. [2]

Enthalpy of (ΔH_c^\ominus) of fructose = $-2810 \text{ kJ mol}^{-1}$

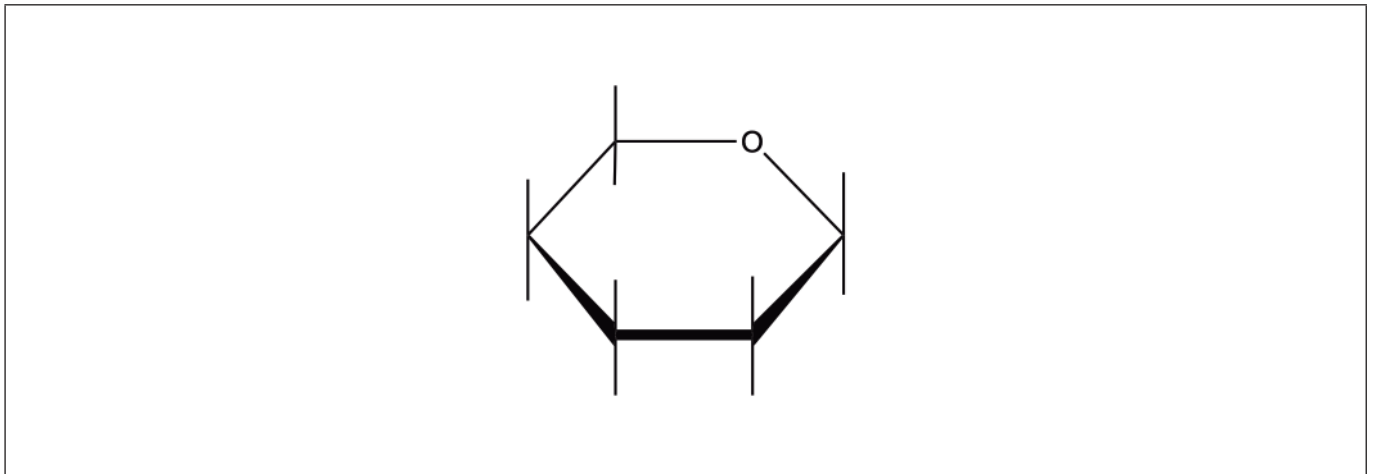
.....
.....
.....
.....

(Option B continues on the following page)



(Option B, question 7 continued)

- (b) Glucose, an isomer of fructose, exists as two isomeric ring forms. Annotate the diagram below to complete the structure of β -glucose. Use section 34 of the data booklet. [1]



- (c) Cellulose is a polymer of β -glucose. Describe the importance of cellulose in the human diet. [1]

.....

.....

- (d) Lipids and carbohydrates both release energy in the body.
 - (i) Write balanced equations for the complete oxidation of fructose, $C_6H_{12}O_6$, and the triglyceride tristearin, $C_{57}H_{110}O_6$. [2]

$C_6H_{12}O_6$:

.....

$C_{57}H_{110}O_6$:

.....

- (ii) Predict, giving **one** reason, whether 10.5g of the triglyceride tristearin would release more or less energy than 10.5g of fructose when completely oxidized. [1]

.....

.....

.....

(Option B continues on the following page)



44EP19

Turn over

(Option B, question 7 continued)

- (e) Describe the chemical composition of phospholipids and their function in the body, other than as energy storage.

[2]

Chemical composition:
.....
Function:
.....

8. The amino acids in a protein can be separated using paper chromatography. The R_f values using a solvent of butanol and ethanoic acid are given.

Amino acid	R_f value
Lysine	0.14
Glutamic acid	0.30
Threonine	0.35
Tyrosine	0.45
Asparagine	0.5
Methionine	0.55
Valine	0.61
Tryptophan	0.66
Leucine	0.73

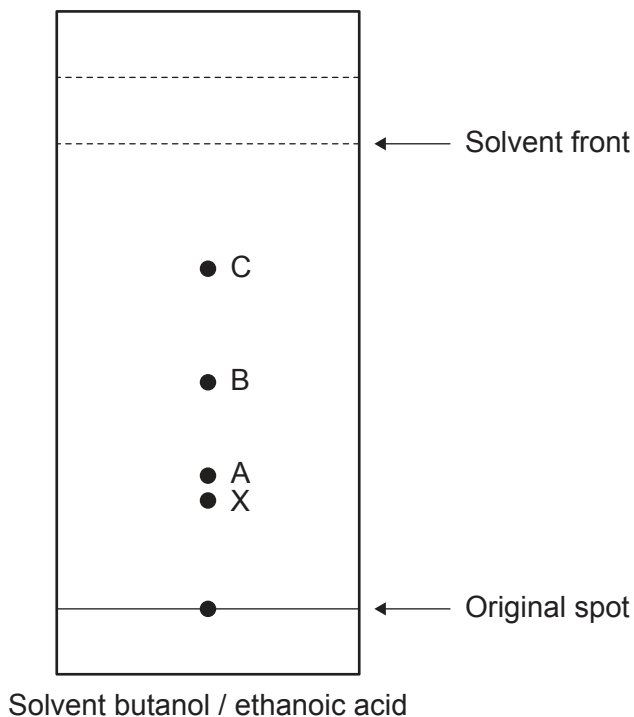
(Option B continues on the following page)



44EP20

(Option B, question 8 continued)

(a) The following diagram shows a chromatogram.



(i) Determine the identity of the amino acid creating spot C by calculating the R_f value from the chromatogram. [1]

Identity of spot C:

(ii) Predict, referring to the structure of the amino acids, whether spot X on the chromatogram in part (a)(i) is more likely to be serine or phenylalanine. Use the table of R_f values and section 33 of the data booklet. [2]

.....
.....
.....
.....

(Option B continues on page 23)



Turn over

Please **do not** write on this page.

Answers written on this page
will not be marked.



44EP22

(Option B, question 8 continued)

- (b) One role of proteins in the body is to catalyse reactions. Describe how enzymes catalyse reactions in the body. [2]

.....

.....

.....

.....

- (c) State **one** industrial use of enzymes. [1]

.....

.....

- (d) Explain how a non-competitive inhibitor affects the Michaelis constant, K_m , and V_{max} of a reaction. Refer to the reaction between the inhibitor and the enzyme in your answer. [3]

Effect on K_m :

Effect on V_{max} :

Explanation for K_m :

.....

.....

Explanation for V_{max} :

.....

.....

- (e) Determine the concentration, in mol dm^{-3} , for a protein sample with absorbance of 0.50 at 240 nm. Use section 1 of the data booklet. [2]

Molar extinction coefficient = $0.75 \text{ dm}^3 \text{ cm}^{-1} \text{ mol}^{-1}$
Path length = 1.0 cm

.....

.....

(Option B continues on the following page)



44EP23

Turn over

(Option B continued)

9. DNA is an essential biological molecule.

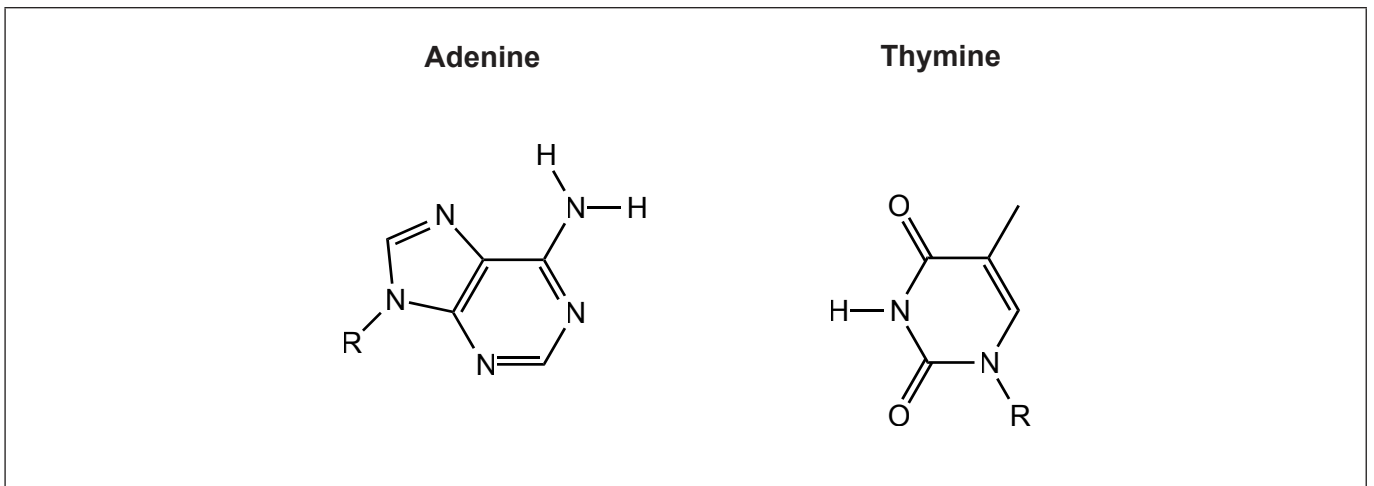
(a) State the **three** components of a monomer of DNA (a nucleotide).

[1]

.....
.....

(b) Draw the hydrogen bonds between adenine and thymine.

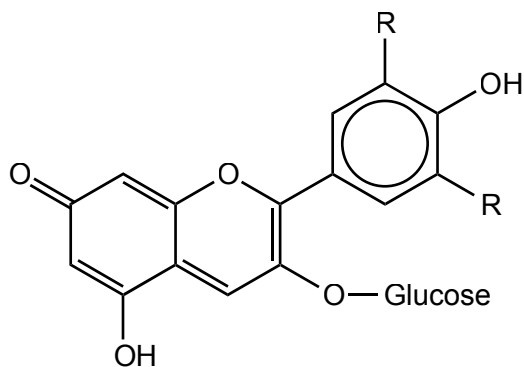
[1]



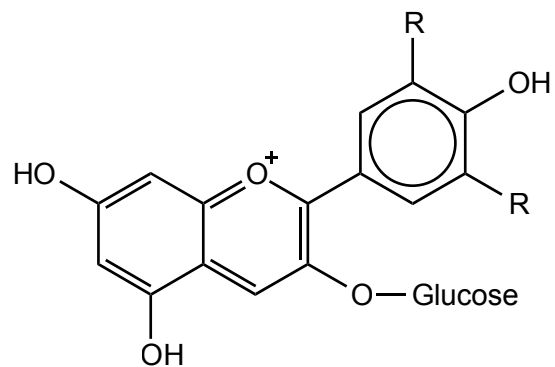
10. There are many biological pigments.

Anthocyanins are pigments that can be used as pH indicators.

Anthocyanin X



Anthocyanin Y



(Option B continues on the following page)



44EP24

(Option B, question 10 continued)

(a) Explain which form of the anthocyanin, **X** or **Y**, predominates at a pH of 12. [1]

.....
.....

(b) State **one** factor, other than pH, that can affect the stability of anthocyanins. [1]

.....

(c) Outline **one** structural similarity **and one** structural difference between hemoglobin and myoglobin. [2]

Similarity:

.....

Difference:

.....

11. Outline the meaning of the term *xenobiotic*. [1]

.....
.....

End of Option B



44EP25

Turn over

Option C — Energy

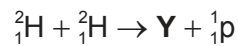
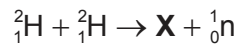
12. Energy is often converted into more usable forms.

(a) The efficiency of a nuclear power plant is approximately 33%.

(i) Outline the meaning of the above statement in terms of energy conversion. [1]

.....
.....
.....

(ii) The fusion of two deuterium nuclei, ${}^2_1\text{H}$, can occur in two ways:



Deduce the nuclear symbols for **X** and **Y** using the correct notation. [1]

X:
.....
Y:
.....

(iii) Explain which fusion reaction of deuterium releases more energy. Use section 36 of the data booklet. [1]

.....
.....
.....

(Option C continues on the following page)



(Option C, question 12 continued)

- (iv) The mass of deuteron, the nucleus of a deuterium atom, is 2.013553 amu. Determine the binding energy, in J, of deuteron. Use sections 2 and 4 of the data booklet and $1 \text{ amu} = 1.660540 \times 10^{-27} \text{ kg}$. [3]

.....

.....

.....

.....

.....

.....

- (v) Suggest why the specific energy of deuterium in fusion is higher than that of uranium-235 in fission, yet the energy density of uranium is significantly greater than that of deuterium. Use section 1 of the data booklet. [4]

.....

.....

.....

.....

.....

.....

.....

- (vi) Uranium needs to be enriched from its natural isotope, ^{238}U , to the more fissile ^{235}U for use in nuclear reactors. Explain how the proportion of ^{235}U in natural uranium is increased. [2]

.....

.....

.....

.....

.....

(Option C continues on the following page)



44EP27

Turn over

(Option C, question 12 continued)

(b) Catalytic reforming and cracking can produce more efficient fuel.

(i) Deduce the equation for the conversion of heptane to methylbenzene. [1]

.....
.....

(ii) Identify **two** products that can be formed from cracking heptane. [1]

.....
.....
.....
.....

(Option C continues on the following page)



44EP28


(Option C continued)

13. Biofuels can be synthesized or converted to make them more usable.

(a) Write the equation for the fermentation of glucose, $C_6H_{12}O_6$, to produce ethanol. [1]

.....
.....

(b) Deduce the equation for the reaction of the triglyceride shown with methanol. [2]



(c) Outline the essential feature needed for a molecule to convert light energy into chemical energy. [1]

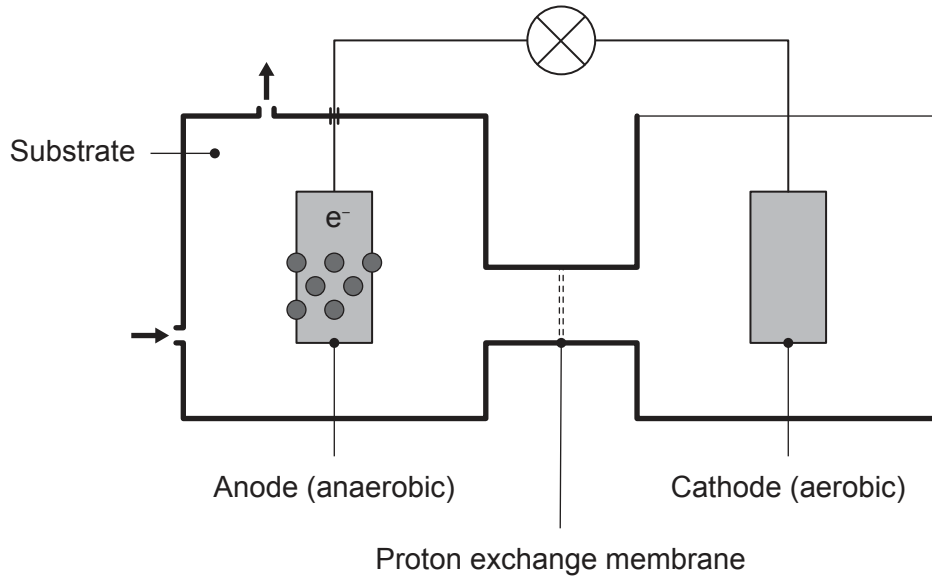
.....
.....
.....

(Option C continues on the following page)



(Option C, question 13 continued)

- (d) The *Geobacter* bacterium anaerobically oxidizes substances present in the substrate of microbial fuel cells. For example, ethanoate ions, $\text{CH}_3\text{COO}^- (\text{aq})$, are oxidized to carbon dioxide gas.



- (i) Outline the function of the proton exchange membrane. [1]

.....
.....

- (ii) Write equations for the reactions occurring at the anode and cathode, and an overall equation for a microbial fuel cell containing ethanoate ions. [3]

Anode:

Cathode:

Overall equation:

(Option C continues on the following page)



(Option C, question 13 continued)

(iii) Suggest **one** reason why microbial fuel cells might be a sustainable energy source. [1]

.....
.....
.....

14. Energy production often has associated costs. Global warming potential (GWP) is a measure of heat absorbed by a greenhouse gas relative to the heat absorbed by the same mass of carbon dioxide.

(a) Suggest **one** piece of evidence, other than temperature rise, that shows correlation between greenhouse gas emission and global warming. [1]

.....
.....

(b) Outline how greenhouse gas molecules absorb infrared radiation. [1]

.....
.....
.....

(c) The GWP of methane is approximately 21. Estimate the heat absorbed by one mole of methane relative to a mole of carbon dioxide. [2]

.....
.....
.....
.....

(Option C continues on page 33)



44EP31

Turn over

Please **do not** write on this page.

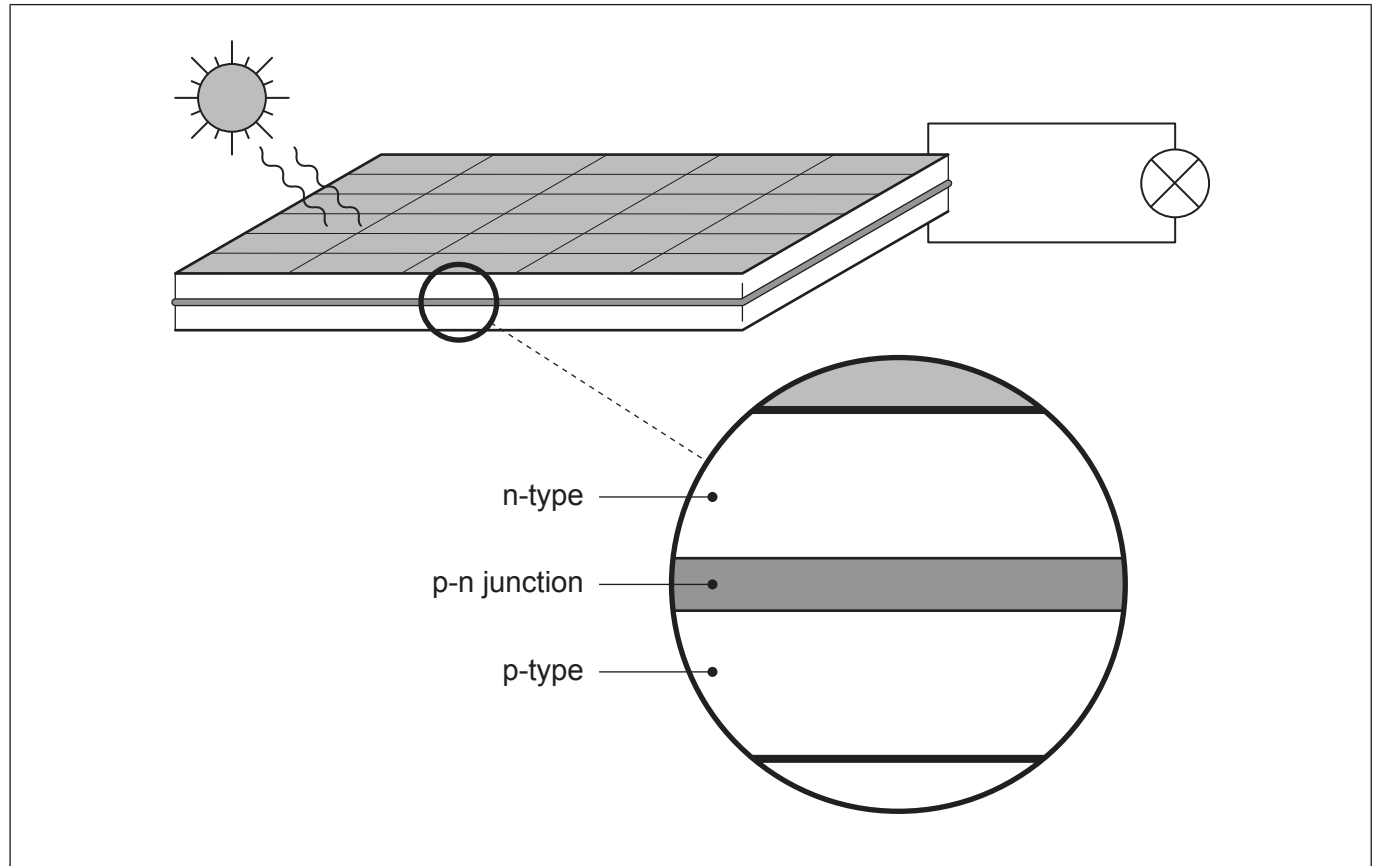
Answers written on this page
will not be marked.



44EP32

(Option C continued)

15. Photovoltaic cells often contain p- and n-type materials on either side of a p-n junction.



- (a) Annotate the diagram to show the charge separation at the p-n junction and flow of electrons through the external circuit. [2]
- (b) Identify **one** element that could be used as the material for the p-n junction. [1]

.....

End of Option C



44EP33

Turn over

Option D — Medicinal chemistry

16. Drugs are commonly prescribed by medical professionals to treat illness.

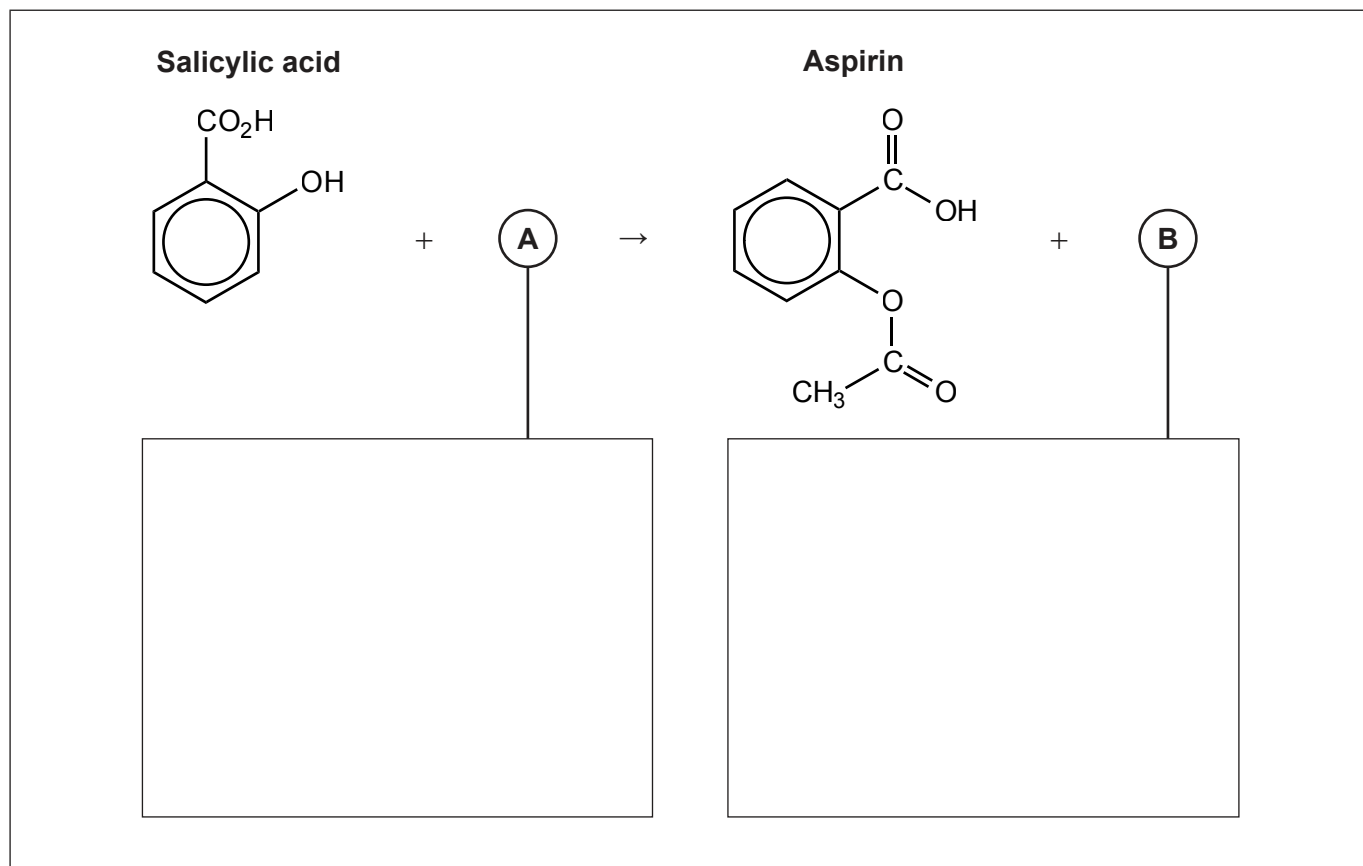
(a) State **two** different drug administration methods. [1]

.....
.....

(b) Explain how aspirin works as a mild analgesic. [2]

.....
.....
.....
.....

(c) Deduce the structural formulae of the missing reactant **A** and product **B** in the synthesis of aspirin from salicylic acid. [2]



(Option D continues on the following page)



(Option D, question 16 continued)

- (d) State **one** advantage **and one** disadvantage of prescribing opiates to patients. [2]

Advantage:

.....

Disadvantage:

.....

17. Magnesium carbonate and aluminium hydroxide are two antacids.

- (a) Write **two** equations showing how these antacids neutralize excess hydrochloric acid. [1]

Magnesium carbonate:

.....

Aluminium hydroxide:

.....

- (b) Show by calculation that a 2.00 g tablet of aluminium hydroxide would neutralize more hydrochloric acid than a 2.00 g tablet of magnesium carbonate. [2]

.....

.....

.....

.....

.....

.....

(Option D continues on the following page)



44EP35

Turn over

(Option D continued)

18. Many illnesses are caused by bacteria and viruses.

(a) Explain **two** ways antiviral medications prevent the replication of viruses. [2]

.....

.....

.....

.....

.....

(b) Bacterial infections are treated using antibiotics such as penicillin. Suggest how penicillin can be modified and the reasons for the modification. [2]

.....

.....

.....

.....

(Option D continues on the following page)

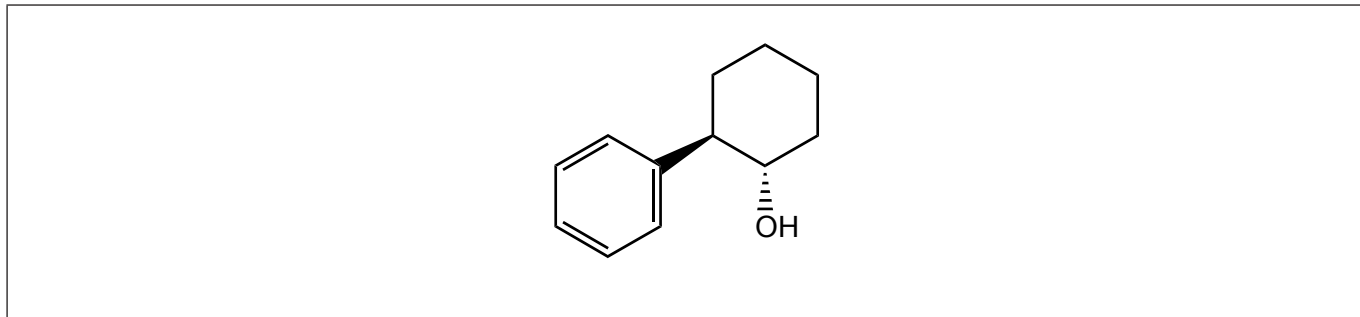


44EP36

(Option D continued)

19. The chemotherapy drug Taxol is now manufactured using a chiral auxiliary and 10-deacetybaccatin III instead of the bark of Pacific yew trees.

- (a) A chiral auxiliary used in the synthesis of Taxol is trans-2-phenylcyclohexanol. Deduce and label with asterisks (*) the positions of the **two** chiral carbon atoms in the molecule. [2]



- (b) State **one** natural source of 10-deacetybaccatin III now used to synthesize Taxol. [1]

.....

- (c) State **two** principles of green (sustainable) chemistry in drug manufacturing, other than using less hazardous or toxic reactants. [2]

.....
.....
.....
.....

(Option D continues on the following page)



44EP37

Turn over

(Option D continued)

20. Two radiation treatments for cancer are Targeted Alpha Therapy, TAT, and Boron Neutron Capture Therapy, BNCT.

- (a) Describe which cancers are treated by TAT and BNCT and the particles used in each treatment. [2]

TAT:

.....

BNCT:

.....

- (b) Suggest **two** reasons why technetium-99m is the most commonly used radioisotope in nuclear medicine. [2]

.....

.....

.....

.....

- (c) A freshly prepared solution for radiodiagnostics contains $1.0 \times 10^{-7} \text{ mol dm}^{-3}$ of technetium-99m. Determine the concentration, in mol dm^{-3} , of technetium-99m remaining in the solution 22.00 hours later. Use section 1 of the data booklet. [2]

Half-life of technetium-99m = 6.01 h

.....

.....

.....

.....

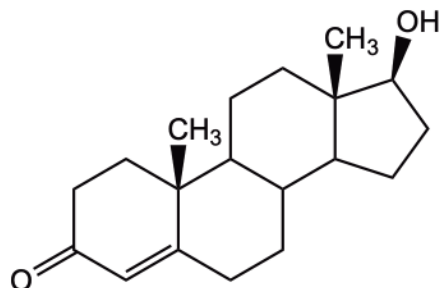
(Option D continues on the following page)



(Option D continued)

21. Analytical chemistry is very important in drug detection.

(a) An example of a steroid is testosterone.



(i) State the technique used to separate steroids, such as testosterone, from biological fluids.

[1]

.....

.....

(Option D continues on the following page)

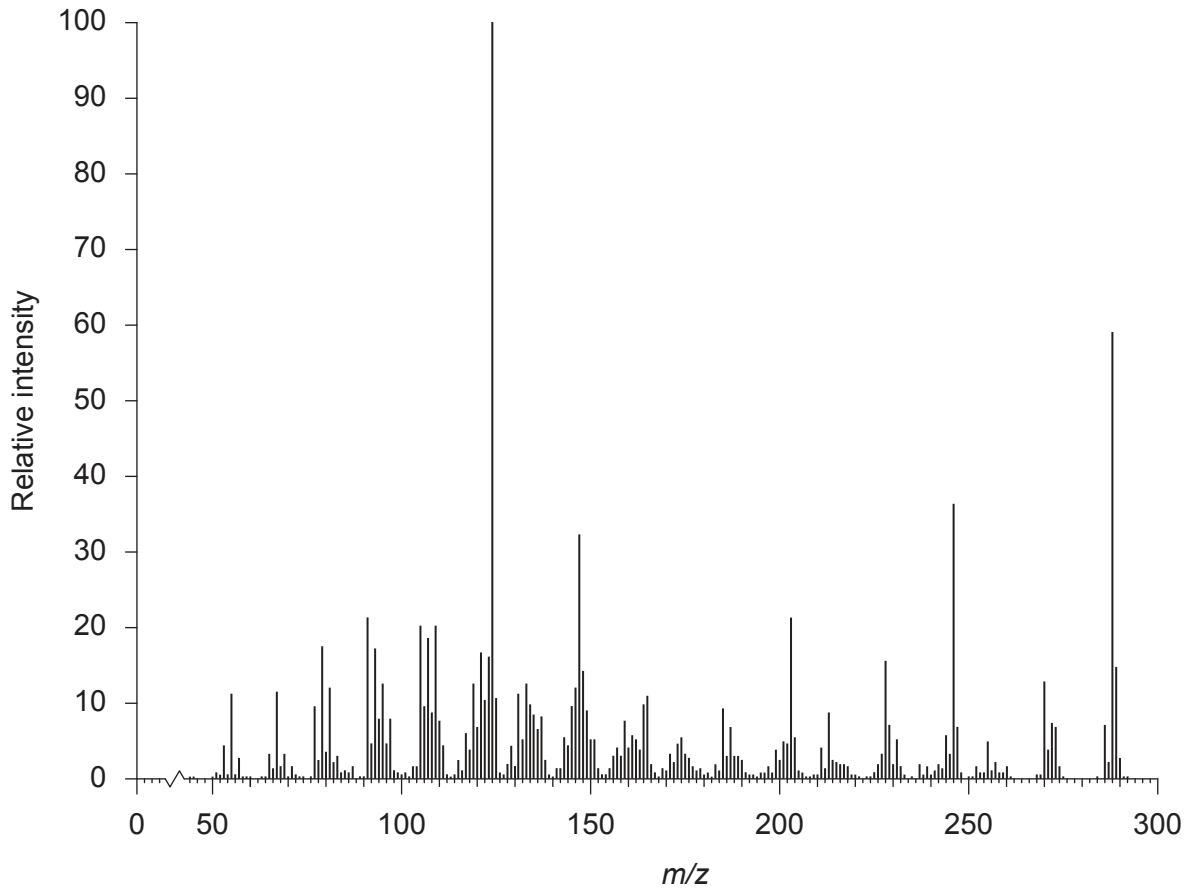


44EP39

Turn over

(Option D, question 21 continued)

Once separation has been completed, the components can be identified using mass spectrometry. The following mass spectrum is of testosterone:



(ii) Explain how the fragments at m/z 288 and 273 can be used to show that it is testosterone, $C_{19}H_{28}O_2$, M_r 288.

[2]

m/z 288:
.....
 m/z 273:
.....

(Option D continues on the following page)



44EP40

(Option D, question 21 continued)

- (b) One breathalyser technique is to measure the change in colour when the dichromate ion is reduced to the chromium (III) ion:

Orange

Green



Deduce the half-equation for the oxidation of ethanol and the overall redox equation occurring in the breathalyser.

[2]

Half-equation for oxidation of ethanol:

.....

Overall balanced redox equation:

.....

End of Option D



44EP41

Disclaimer:

Content used in IB assessments is taken from authentic, third-party sources. The views expressed within them belong to their individual authors and/or publishers and do not necessarily reflect the views of the IB.

References:

1. Wikipedia, n.d. *Electron affinity*. [online] Available at: https://en.wikipedia.org/wiki/Electron_affinity [Accessed 22 June 2021]. Source adapted.
- 3.(b)(iv) A. Campopiano, A. Cannizzaro, A. Olori, S. Boccanera. Study of a selection of man-made organic fibres. *Prevention Today*, vol.5, n.1/2, 33–49. Editorial Office: ISPESL-Department of Organization Processes. (The law of 30 July 2010, n. 122 attributed to INAIL the functions performed in the past by ISPESL).
8. BioTopics. n.d. *Chromatography of amino acids*. [online] Available at: https://www.biopics.co.uk/as/amino_acid_chromatography.html [Accessed 20 May 2021]. Source adapted.
- 12.(a)(iv) NIST, n.d. *Deuteron mass in u*. [online] Available at: <https://physics.nist.gov/cgi-bin/cuu/Value?mdu#mid> [Accessed 20 May 2021].
- 13.(d) Belafi-Bako, K., Vajda, B., Bakonyi, P., Nemestothy, N., 2014. *Removal of COD by Two-Chamber Microbial Fuel Cells*. The scheme of a two-chamber microbial fuel cell [image online]. Available at: <https://www.intechopen.com/books/technology-and-application-of-microbial-fuel-cells/removal-of-cod-by-two-chamber-microbial-fuel-cells> [Accessed 20 May 2021]. Source adapted.
15. Dr. Rashmi. S. B, et al. 2020. Design of a Solar Charger Circuit for Recharging Batteries of Communication Devices. *International Journal of Engineering Science and Computing (IJESC)*. Volume 10 Issue No.7. Pg 26922. <https://ijesc.org/articles-in-press.php?msg=1&page=article>. Creative Commons Attribution 3.0 Unported <https://creativecommons.org/licenses/by/3.0/>. Source adapted (Figure 3 redrawn and relabeled).
- 21.(a)(ii) SDBS, National Institute of Advanced Industrial Science and Technology.

All other texts, graphics and illustrations © International Baccalaureate Organization 2023



44EP42

Please **do not** write on this page.

Answers written on this page
will not be marked.



44EP43

Please **do not** write on this page.

Answers written on this page
will not be marked.



44EP44